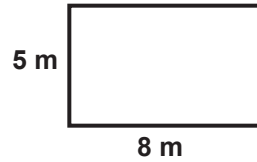


Finding the Area of Quadrilaterals

AREA 1


Instructions: Find the area of each square or rectangle using the formula: $A = L \times W$.

1

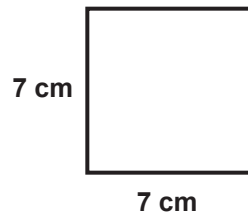


$$A = 5 \times 8 = 40 \text{ m}^2$$

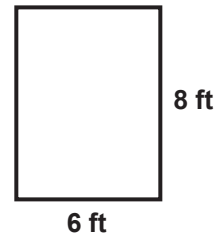
2



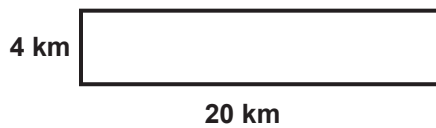
3



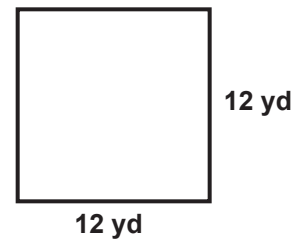
4



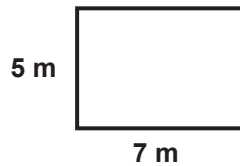
5



6



7



8

